


**NORTH-EX PUBLIC SCHOOL**

(Senior Secondary, Affiliated To CBSE)

School Block, Jain Nagar, Sector-38, Rohini, Delhi – 81

**Winter Holiday Homework (2025-26)**

**Class – IV**



## ENGLISH

Q1) Underlined the verb and Identify whether it is an Action Verb (A) or a Linking Verb (L).

- a) She runs very fast. → \_\_\_\_\_
- b) The soup tastes delicious. → \_\_\_\_\_
- c) They built a sandcastle. → \_\_\_\_\_
- d) He is a good dancer. → \_\_\_\_\_
- e) The flowers smell sweet. → \_\_\_\_\_

Q2) Fill in the blanks with suitable conjunctions from the box.

**(and, but, because, or, although)**

- a) I wanted to play outside, \_\_\_\_\_ it was raining.
- b) She is smart \_\_\_\_\_ hardworking.
- c) You can have ice cream \_\_\_\_\_ cake.
- d) He stayed home \_\_\_\_\_ he was not feeling well.
- e) \_\_\_\_\_ it was cold, we went for a walk.

Q3) Do you think the poem effectively conveys the feeling of Christmas? Why or why not?

---

---

---

---

---

Q4) Do you think the travellers were good people or were they going to trick the Villagers? Give reasons.

---

---

---

---

---

Q5) Why were the traveller's were tired and hungry?

---

---

---

---

---

Q6) C. Answer with reference to the context. Let's give them a lesson.. we will teach them how to cook a stone soup!"

1. Who said these words?

- i. the narrator    ii. Benny    iii. Miolka    iv. Ivan

b) Who are 'them'?

- i. the villagers    ii. The travellers    iii. The children    iv. The narrator

c) What is the tone of the speaker here?

- i. happy    ii. Concerned    iii. Angry    iv. Satisfied

हिंदी

1. जब आप किसी नदी या समुद्र के किनारे सैर करने जाते हैं तो वहाँ आपको कौन-सी चीजें अच्छी व बुरी लगती हैं? चार से पाँच वाक्यों में लिखिए।

---

---

---

---

---

---


---

---

---

---

2. स्वच्छता की उपयोगिता बताते हुए पोस्टर बनाकर स्लोगन लिखिए-



3. यदि कभी आप किसी मुसीबत में फँस जाते हैं, तो उससे निकलने के लिए क्या करेंगे?

---

---

---

---

---

---

---

---

---

---

4. नीचे दिए गए वाक्यों में सही कारक चिह्न चुनकर लिखिए।

1. कमरे\_\_\_\_\_ फ्रिज रखा है।
2. मजदूर जहाज\_\_\_\_\_ सामान उतार रहा है।
3. पुनीत \_\_\_\_\_अमित \_\_\_\_\_पत्थर मारा।
4. राजू \_\_\_\_\_दुकान उस तरफ है।
5. दादाजी चारपाई\_\_\_\_\_ बैठे हैं।
6. राम\_\_\_\_\_ रावण \_\_\_\_\_मारा।

7. लड़के मैदान \_\_\_\_\_ खेल रहे हैं।

8. वह भारत \_\_\_\_\_निवासी है।

9. माँ\_\_\_\_\_ राजू\_\_\_\_\_ खाना बनाया।

10. रहमत \_\_\_\_\_ घड़ी खराब है।

5. “छत्रपति शिवाजी महाराज” पर निबंध लिखिए-

[illegible]

## Mathematics

Q.1. Fill in the blanks-

1. The distance around a shape is called its \_\_\_\_\_.
2. Perimeter of a square = \_\_\_\_\_  $\times$  side
3. Perimeter of a rectangle = \_\_\_\_\_  $\times$  \_\_\_\_\_ + \_\_\_\_\_ .
4. The unit of perimeter is always in \_\_\_\_\_.

Q.2. Find the Perimeter-

- I. A square has a side of 6 cm.  
Perimeter = \_\_\_\_\_
- II. A rectangle has length 8 cm and breadth 5 cm.  
Perimeter = \_\_\_\_\_
- III. A triangle has sides 4 cm, 6 cm, and 8 cm.  
Perimeter = \_\_\_\_\_
- IV. A rectangle has length 12 m and breadth 7 m.  
Perimeter = \_\_\_\_\_

Q.3. Word Problems-

- A. The length of a rectangular garden is 15 m and its breadth is 10m. Find the perimeter of the garden.

---

---

---

---

---

---

- B. A square playground has a side of 25 m. Find the total distance covered if a child runs once around it.

---

---

---

---

---

---

- C. Rina has a ribbon 40 cm long. She uses it to border a square card. What is the length of one side of the card?

---

---

---

---

---

---

---

- D. A triangle has sides 7 cm, 9 cm, and 11 cm. Find its perimeter.

---

---

---

---

---

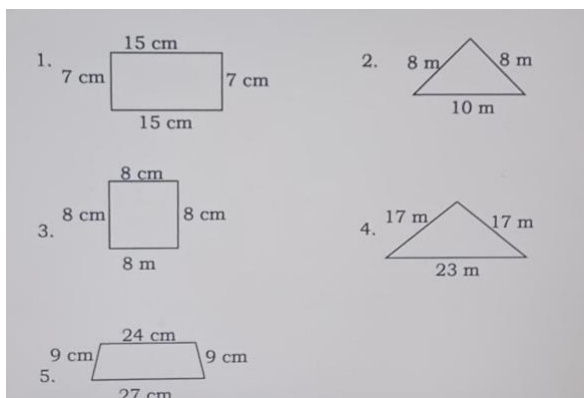
---

---

Q.4. True or False-

- Perimeter of a square is four times its side. (      )
- Perimeter is measured in square units. (      )
- A rectangle has four sides. (      )
- The formula of perimeter of a rectangle is  $2 \times (\text{length} + \text{breadth})$ .

Q.5 Find the perimeter of these figures-



This image shows a single sheet of white paper with horizontal ruling lines. The lines are evenly spaced and run across the width of the page. There are no vertical margin lines or other markings present.

Q1) Fill in the blanks-

Q2) Write true or false-

Q3) Define the following terms-



b) Social animals

---

---

c) camouflage

---

---

Q4) Answer the following questions-

a) Write four reasons due to which water bodies get polluted.

---

---

---

---

b) How do honey collectors collect honey from the beehive.

---

---

---

---

---

c) Why some animals move in groups?

---

---

---

---

d) Describe the ears of birds and lizards.

---

---

---

---

Q5) Complete the flow chart-

### **V.A.**

**1. Make a wall hanging on Republic Day.**

**2. Make a poster on Basant panchami.**

### **Computer**

1. Write the components of scratch window in n.book.
2. Type few lines on four seasons in Ms-word and paste the hard copy in n.book if not possible then write in n.book.
3. Draw birthday party scene using of word art in n.book.
4. Write any five uses of the Internet in n.book.
5. Complete Chapters- 5 to 8 book, n.book work &revise.

### **General Knowledge**

1. Write 10 lines on Jalianwala Bagh.
2. Write 10 lines on Kirti Chakra.