

NORTH-EX PUBLIC SCHOOL  
(Senior Secondary, Affiliated To CBSE)  
School Block, Jain Nagar, Sector-38, Rohini, Delhi 81  
WINTERS HOLIDAY HOMEWORK Session (2025-26)  
Class - 1<sup>st</sup>

Name : \_\_\_\_\_

Roll no : \_\_\_\_\_

HAPPY HOLIDAYS !

Colour the picture :



## ENGLISH

Ques1. Fill in the blanks with correct prepositions:

1. The cat is \_\_\_\_\_ the table. ( Under / In)
2. The book is \_\_\_\_\_ the bag. ( Between / In)
3. The apple is \_\_\_\_\_ the two oranges.(Between/On)
4. The toy is \_\_\_\_\_ the shelf. ( In / Near)
5. The tree is \_\_\_\_\_ the house. ( Near / On)

Ques2. Write the rhyming words of each :

1. Potato - \_\_\_\_\_
2. Sing - \_\_\_\_\_
3. Glove - \_\_\_\_\_
4. Cook - \_\_\_\_\_
5. Bread - \_\_\_\_\_
6. Coffee - \_\_\_\_\_

Ques3. Fill in the blanks using This or That:

1. \_\_\_\_\_ is a kite.


2. \_\_\_\_\_ is a doll.

3. \_\_\_\_\_ is a rose.

4. \_\_\_\_\_ is an owl.


5. \_\_\_\_\_ is a pot.

6. \_\_\_\_\_ is a bell.



Ques 4 . Write about your feelings in the winter vacation using different emotion faces.

Do this work on an A3 size sheet.




Ques 5. Fill in the blanks with And or But:

1. The pen is small \_\_\_\_\_ light.
2. My shoes are clean \_\_\_\_\_ yours are dirty.
3. This car is yours \_\_\_\_\_ that one is not.
4. His uncle is big \_\_\_\_\_ strong.
5. Chicken have wings \_\_\_\_\_ they cannot fly.
6. Sam likes apples \_\_\_\_\_ pears.


**Ques6. Look at the picture and fill it the blanks:**

**Grapes ,Vitamins, Juicy ,Green, Sweet**



1. \_\_\_\_\_ are round fruit.
2. Grapes are \_\_\_\_\_ and small in shape.
3. Grapes are of many colours like \_\_\_\_\_, purple and black.
4. Grapes are very \_\_\_\_\_ and tasty.
5. Grapes are good source of \_\_\_\_\_

**Ques 7. Look at the picture and answer the following questions :**



**1. What are the children doing ?**

**Ans - \_\_\_\_\_**

**2. How many children are there ?**

**Ans - \_\_\_\_\_**

**3. How many girls are there ?**

**Ans - \_\_\_\_\_**


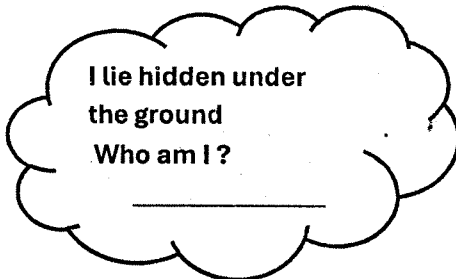
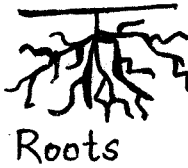
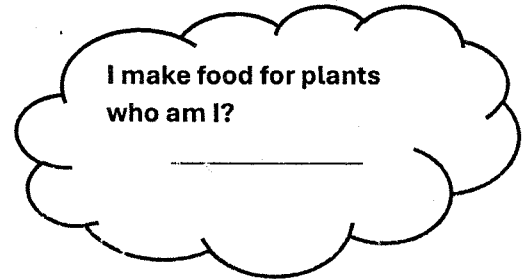
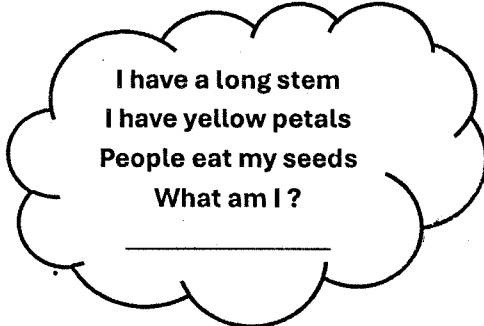
**4. Where are they playing ?**

**Ans - \_\_\_\_\_**

## EVS

### Ques1. Riddle time :

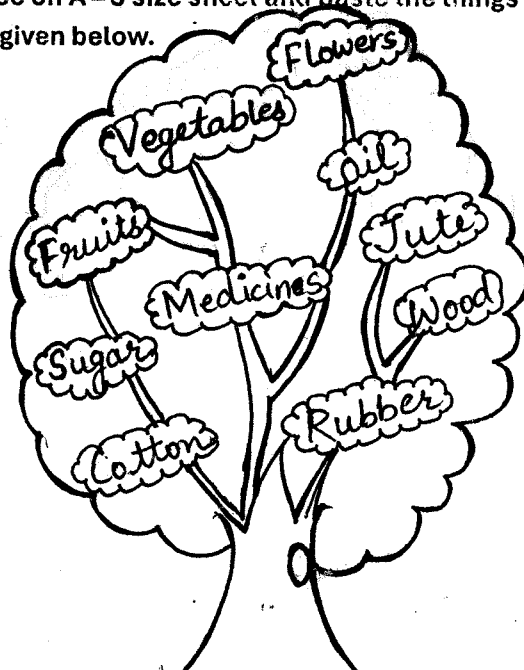
Crack the given riddles and find them :



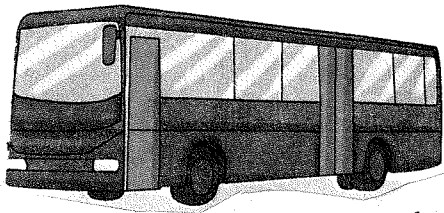
### Ques2. Name any two :


1. Land transport - \_\_\_\_\_
2. Shrubs - \_\_\_\_\_
3. Water transport - \_\_\_\_\_
4. Uses of water - \_\_\_\_\_
5. Creepers - \_\_\_\_\_


### Ques 3. Draw a tree on A-3 size sheet and paste the things that we get from plants Clue as a given below.





**Ques 4. Look at the pictures and write the name of transport:**












**Ques5. Fill in the blanks.**

1. Moving air is called \_\_\_\_\_.
2. Plants need \_\_\_\_\_ to grow.
3. Trains are pulled by \_\_\_\_\_.
4. \_\_\_\_\_ have four wheels.
5. \_\_\_\_\_ have hard and strong stems.
6. Drinking \_\_\_\_\_ water can make us sick.

**Ques6. Unscramble the letters:**

1. PISH - \_\_\_\_\_
2. RASSG - \_\_\_\_\_
3. KINMPU - \_\_\_\_\_
4. RETSASM - \_\_\_\_\_
5. REEPCERS - \_\_\_\_\_
6. PRAAHCTUE - \_\_\_\_\_

## Maths

Ques1. Read and write :

August ,January, March ,May ,June ,September,  
November


1. What comes after December - \_\_\_\_\_
2. What comes before September - \_\_\_\_\_
3. What comes between April and June - \_\_\_\_\_
4. What comes after October - \_\_\_\_\_
5. What comes before July - \_\_\_\_\_
6. What comes after February - \_\_\_\_\_

Ques2. Match the following:

9:00

11:00

5:00



Ques 3. Dodging tables :

1.  $5 \times 6 =$  \_\_\_\_\_
2.  $2 \times 3 =$  \_\_\_\_\_
3.  $4 \times 2 =$  \_\_\_\_\_
4.  $3 \times 3 =$  \_\_\_\_\_
5.  $5 \times 7 =$  \_\_\_\_\_
6.  $2 \times 10 =$  \_\_\_\_\_

7.  $5 \times 9 =$  \_\_\_\_\_
8.  $2 \times 5 =$  \_\_\_\_\_
9.  $4 \times 8 =$  \_\_\_\_\_
10.  $5 \times 5 =$  \_\_\_\_\_
11.  $4 \times 4 =$  \_\_\_\_\_
12.  $3 \times 10 =$  \_\_\_\_\_

Ques 4. Solve the following:

T	O
	2
X	2

T	O
	4
X	3


T	O
	3
X	3

T	O
	9
X	5


T	O
	5
X	4

T	O
	7
X	2

Ques 4. Write the value of the following:





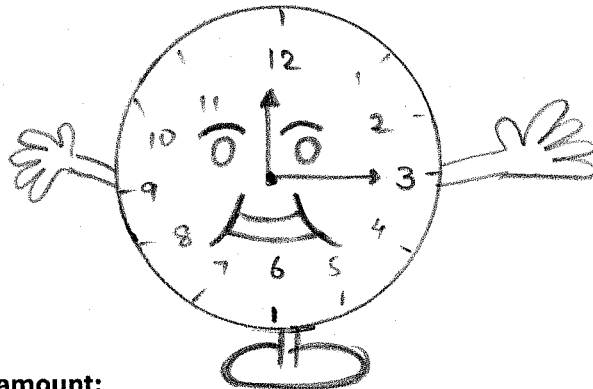









Ques 5. Prepare a wall hanging clock using waste material.



Ques 6. Find the total amount:

₹ 5	+	₹ 2	+	₹ 1	=	<input type="text"/>
₹ 2	+	₹ 1	+	₹ 5	=	<input type="text"/>
₹ 2	+	₹ 2	+	₹ 1	=	<input type="text"/>
₹ 5	+	₹ 5	+	₹ 2	=	<input type="text"/>

## Hindi

प्रश्न1. दवित्व व्यंजन से दो-दो शब्द बनाओ:

1. च्च - \_\_\_\_\_
2. म्म - \_\_\_\_\_
3. क्क - \_\_\_\_\_
4. प्प - \_\_\_\_\_

प्रश्न2. दिए गए वाक्यों में नाम की जगह वाले शब्दों को रेखांकित कीजिए :

1. वह दस साल का हैं।
2. उसका भाई आ गया।
3. यह मेरी बहन हैं।
4. बाहर कोई आया है।
5. मुझे भूख लगी हैं।
6. उसे सोने दो।
7. आप बैठ जाइए।

प्रश्न3 वाक्य में काम करो शब्दों पर गोला लगाइए:

1. गाय चारा खा रही हैं।
2. बच्चा रो रहा हैं।
3. राजा तेज दौड़ता हैं।
4. माँ खाना पका रही हैं।
5. मीना खेल रही हैं।
6. सीमा लिख रही हैं।

प्रश्न4 निम्नलिखित गिनती को अंको व शब्दों में लिखो

1. 12 - \_\_\_\_\_
2. 14 - \_\_\_\_\_
3. 20 - \_\_\_\_\_
4. 11 - \_\_\_\_\_
5. 18 - \_\_\_\_\_
6. 15 - \_\_\_\_\_
7. 13 - \_\_\_\_\_
8. 16 - \_\_\_\_\_



प्रश्न 5, निम्नलिखित प्रश्नों के उत्तर दीजिए:

1. एक सप्ताह में कितने दिन होते हैं - \_\_\_\_\_
2. सप्ताह में किस दिन छुट्टी होती है - \_\_\_\_\_
3. सप्ताह का पहला दिन कौन सा है - \_\_\_\_\_
4. सप्ताह का पांचवा दिन कौन सा है - \_\_\_\_\_
5. सप्ताह में कौन-कौन से दिन श अक्षर से शुरू होते हैं - \_\_\_\_\_

प्रश्न 6. उचित विशेषण शब्द छांटकर खाली जगह पर लिखो :

1. वह आम बहुत \_\_\_\_\_ है। ( मीठा/ धीरे)
2. कमरे में \_\_\_\_\_ लोग बैठे हैं। ( दो/ मीठा)
3. दादा जी को \_\_\_\_\_ चाय पसंद है। ( नीली/ गरम)
4. सूर्य का \_\_\_\_\_ रंग होता है। ( काला/ पीला)
5. सोनाली ने आज \_\_\_\_\_ फ्रॉक पहनी है। ( हरी/ वह)
6. मेरे पास \_\_\_\_\_ किताब है। ( तीन/ उसके)

प्रश्न३: अनुनासिक, अनुस्वार और विसर्ग के शब्द बनाओ :

[illegible]



## **Visual Art**

**Ques 1. Make a wall hanging related to Republic Day.**

**Ques 2. Make a poster on Basant Panchami ( A -3 size sheet)**

## **General knowledge**

**Ques 1. Draw and colour your favourite cartoon character on A – 3 size sheet .**



**Ques 2. During your winter vacation, you will plant a seed in a pot. Water the seed every day and take good care of it. Make sure your plant gets enough sunlight. Observe the plant daily for 15 days and watch how it grows.**

**When school reopens, bring your plant with you so we can all see your beautiful work.**

## **Computer**

**Ques 1. Draw or paste the pictures of different parts of computer.**

**Ques 2. Draw or paste the different types of icons like You tube, WhatsApp, Instagram twitter etc.**